









Puntjessommen: erbij: werkblad 2

	$3 + \cdot = 5$	2
	$6 + \cdot = 10$	6
	$6 + \cdot = 9$	5
	$5 + \cdot = 6$	1
	$3 + \cdot = 9$	3
	$2 + \cdot = 7$	4


Antw: puntjessommen: erbij: werkblad 2




$$3 + 2 = 5$$




$$3 + 6 = 9$$




$$2 + 5 = 7$$



$$5 + 1 = 6$$



$$6 + 3 = 9$$



$$6 + 4 = 10$$